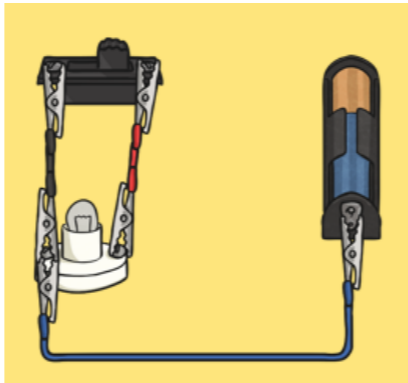
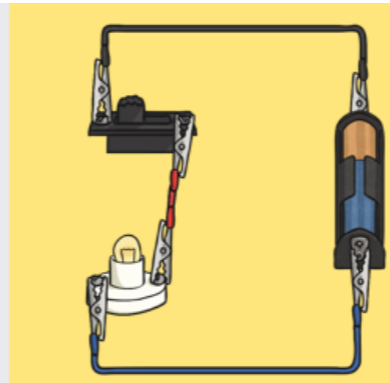


# Physics - Electricity


Subject Specific Vocabulary	
Electricity	
current	
circuit	
appliance	
switch	
conductor	
insulator	
component	
cell	
battery	

**Associated Diagram**

\_\_\_\_\_

Which diagram shows a complete circuit? Which diagram shows an incomplete circuit?

Circle three ways that electricity is being used unsafely in the picture. Explain one of the ways below.

\_\_\_\_\_

\_\_\_\_\_

**Sticky Knowledge**

Name three appliances that run on electricity.

Name an example of a material or object which conducts electricity.

Name an example of a material or object which is an electrical insulator.

List the components that would typically be used for a circuit.

Use scientific vocabulary to explain what a switch does in an electric circuit.